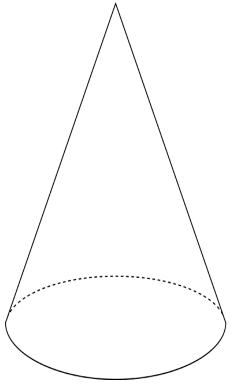
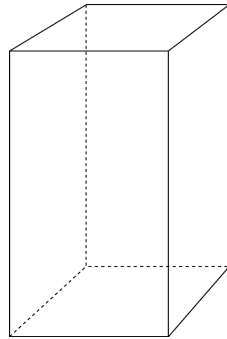



### Label the Geometric Solid #1



\_\_\_\_\_



\_\_\_\_\_



\_\_\_\_\_

A. cone

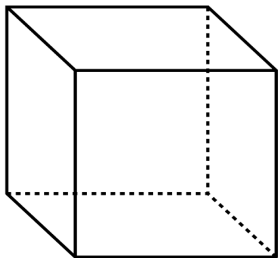
B. cube

C. cylinder

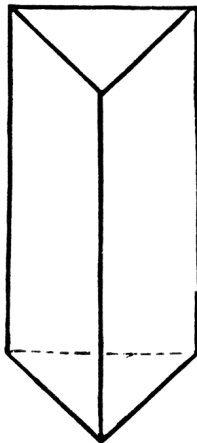
D. rectangular prism

E. sphere


F. triangular prism



\_\_\_\_\_

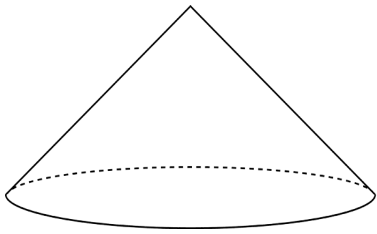


\_\_\_\_\_

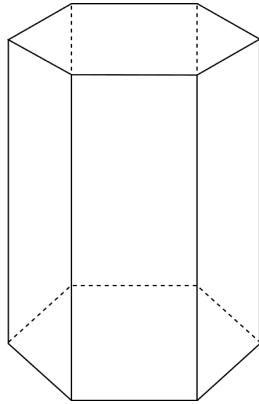


\_\_\_\_\_

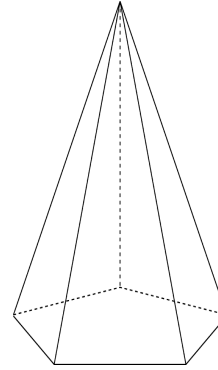
**Label the Geometric Solid #2**



\_\_\_\_\_



\_\_\_\_\_



\_\_\_\_\_

A. square pyramid

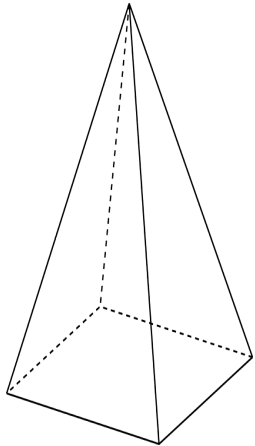
B. rectangular prism

C. pentagonal pyramid

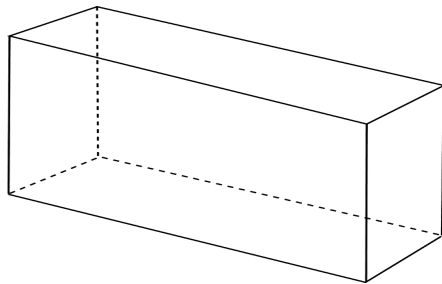
D. octagonal prism

E. hexagonal prism

F. cone



\_\_\_\_\_

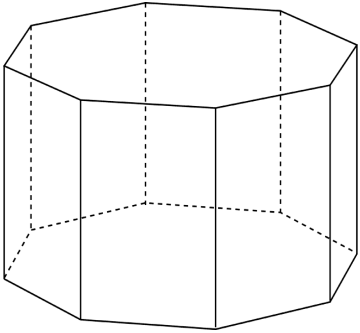


\_\_\_\_\_

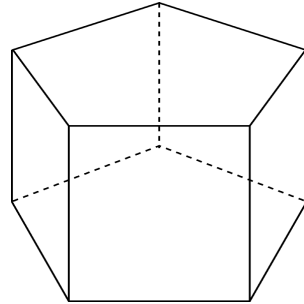


\_\_\_\_\_

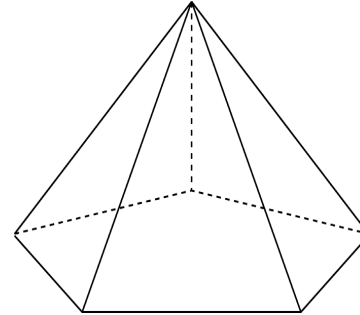
**Label the Geometric Solid #3**



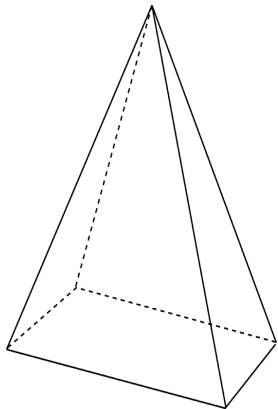
\_\_\_\_\_



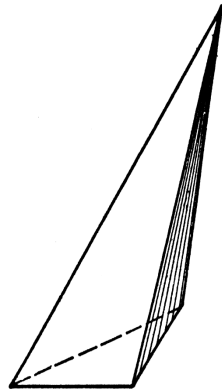
\_\_\_\_\_



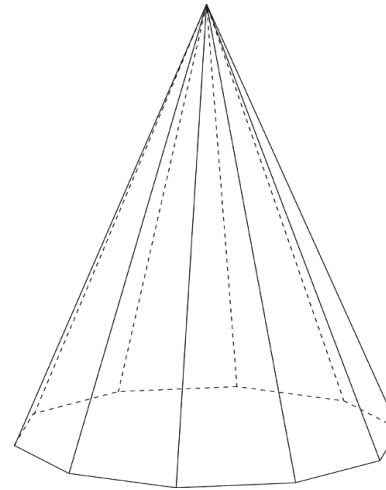
\_\_\_\_\_



\_\_\_\_\_



\_\_\_\_\_



\_\_\_\_\_

- A. triangular pyramid
- B. rectangular pyramid
- C. pentagonal pyramid
- D. pentagonal prism
- E. octagonal prism
- F. decagonal prism

Workbox<sup>sm</sup> idea: Worksheets may be laminated for repeated use.

## Answer Key

<b>Answer Key</b>								
<b>Label the Geometric Solid #1</b>			<b>Label the Geometric Solid #2</b>			<b>Label the Geometric Solid #3</b>		
A	D	E	F	E	C	E	D	C
B	F	C	A	B	D	B	A	F