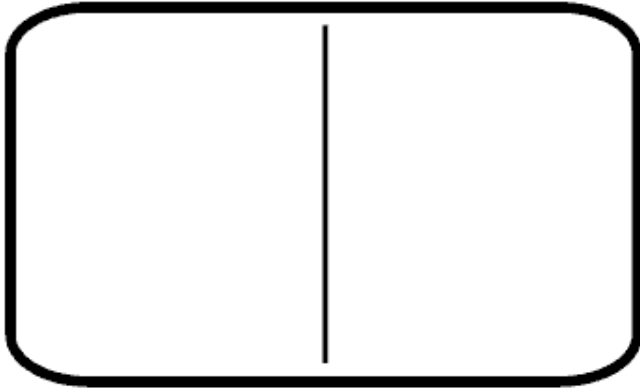
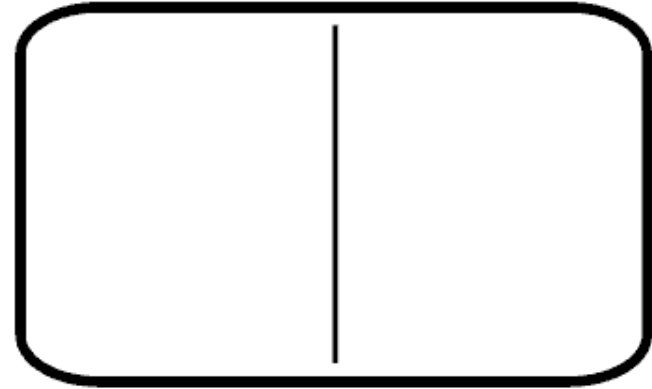


DOMINO FACT FAMILIES

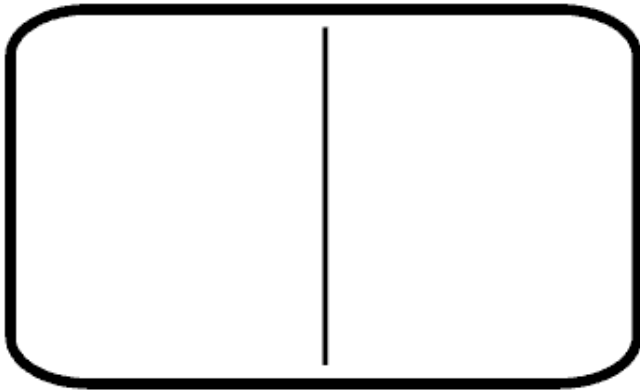
Lay dominoes face down. Pick one and draw correct number of dots below.
Write two different ways to add dots, and two different ways to subtract dots.



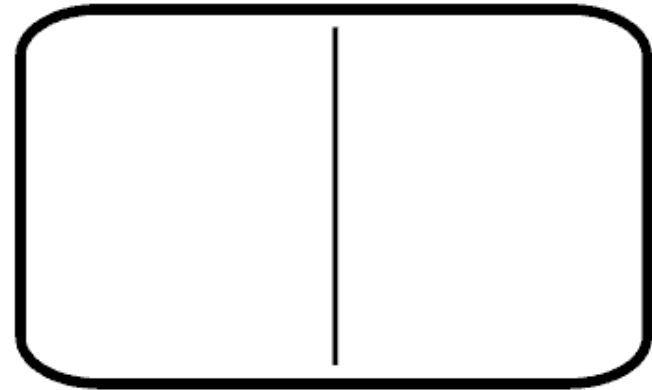
$$\begin{array}{cccc} \text{---} & & \text{---} & \\ \text{---} & + & \text{---} & = \text{---} \\ \text{---} & & \text{---} & \\ \text{---} & & \text{---} & \end{array}$$



$$\begin{array}{cccc} \text{---} & & \text{---} & \\ \text{---} & + & \text{---} & = \text{---} \\ \text{---} & & \text{---} & \\ \text{---} & & \text{---} & \end{array}$$



$$\begin{array}{cccc} \text{---} & & \text{---} & \\ \text{---} & - & \text{---} & = \text{---} \\ \text{---} & & \text{---} & \\ \text{---} & & \text{---} & \end{array}$$



$$\begin{array}{cccc} \text{---} & & \text{---} & \\ \text{---} & - & \text{---} & = \text{---} \\ \text{---} & & \text{---} & \\ \text{---} & & \text{---} & \end{array}$$