



Rebecca's Schedule


Rebecca had a very busy schedule. Draw the hands on the clocks, indicating the correct time, and then write the time in numeric form.




Wake up bell goes off at Four Thirty A.M.




Be at mill by Five Thirty A.M.




Dinner bell rang at Noon



Back at mill by half an hour after noon.



Workday ended at Seven o'clock P.M.



Curfew at Ten o'clock P.M.

How many hours did Rebecca work each day? _____

When do you wake up? _____:_____

When do you eat lunch? _____:_____

When do you go to bed? _____:_____